

Mathematics Workbook

Valid from September 2013 to August 2014

Functional Skills Qualification in Mathematics at Entry 1

Learner name

Learner signature and date

Work through the whole book.

- Answer every question.
- You can write or draw to show your answers in the workbook.
- You can use a calculator.

Your tutor may read the questions to you.

Ask your tutor if you do not understand any words.

You have up to 1 hour to complete the workbook.

Your tutor may give you objects to help you with the questions.

You will need:

- Pencil
- Ruler
- Rubber

Turn over ►

1 The health centre

These people work at the health centre.

How many people work at the health centre?

(1)



Write your answer in the box below.

Flo works at the health centre on Mondays.

She looks at the dates in December.

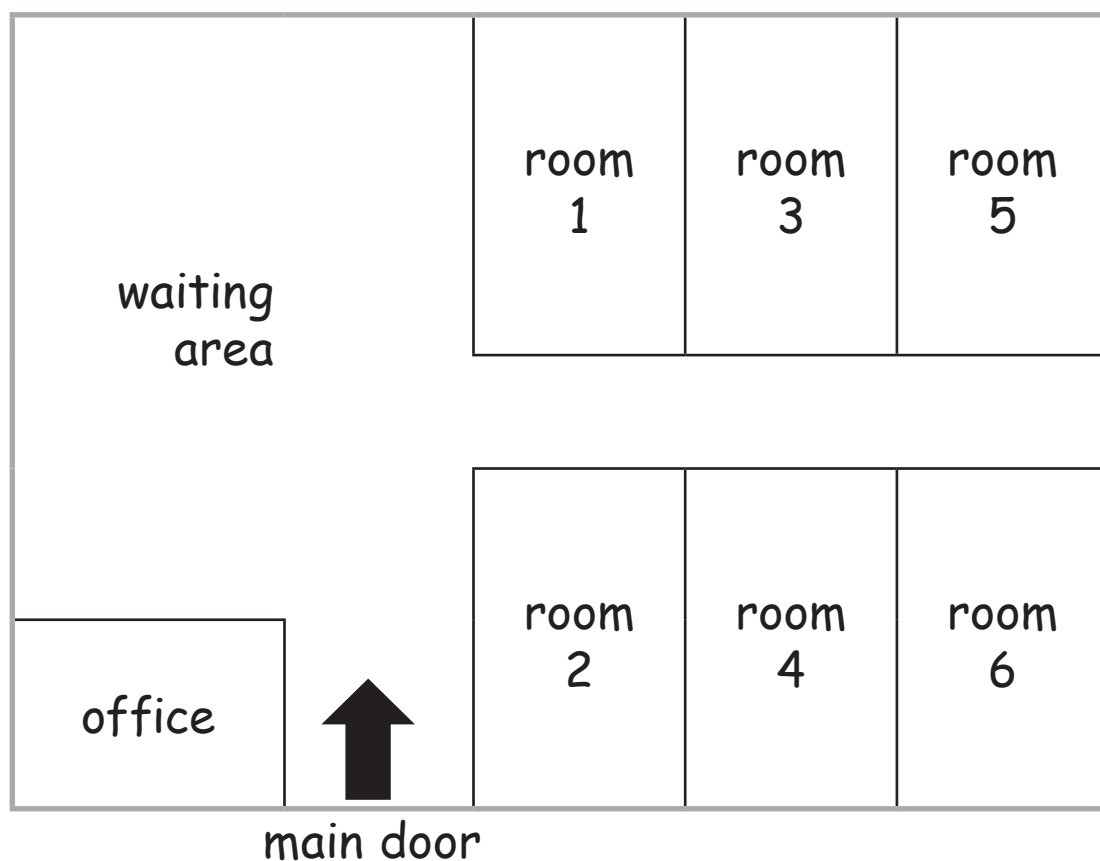
December						
Mon	Tue	Wed	Thu	Fri	Sat	Sun
1	2	3	4	5	6	7
8	9	10	11	12	13	14
15	16	17	18	19	20	21
22	23	24	25	26	27	28
29	30	31				

Which dates are Mondays in December?

(1)

Tick (✓) all the Mondays.

Here is a plan of the health centre.



Where is room 3?

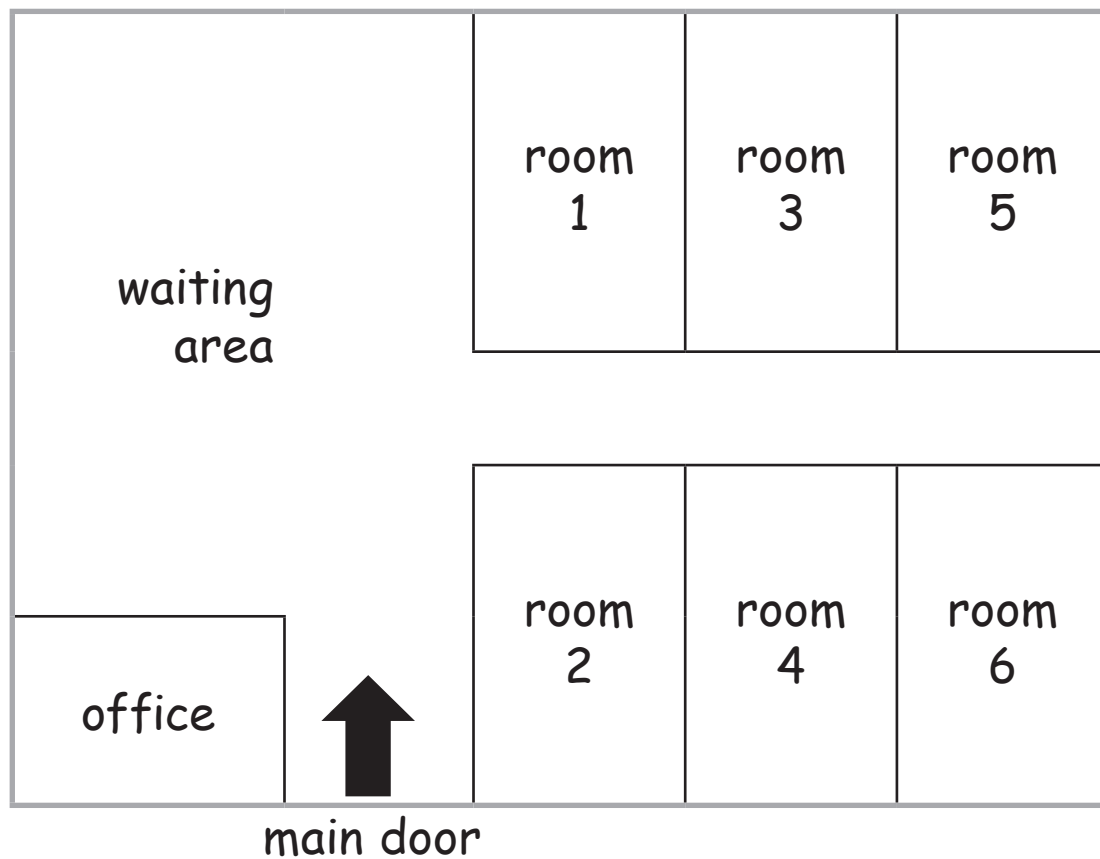
(1)

Tick (✓) the word to make this sentence true.

Room 3 is

above
opposite
between
under

room 1 and room 5



Flo goes in the main door.

She says

The office is on the left.


Is Flo correct?

(1)

Write your answer in the box below.

There is a table in the waiting area.

Here is the shape of the top of the table.

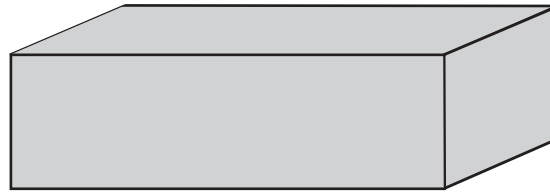


What is the name of this shape?

(1)

Write your answer in the box below.

This is the toy box in the waiting area.



What is the name of the shape of this box?

(1)

Tick (✓) the name of the shape of the toy box.

cylinder
()

cuboid
()








sphere
()

square
()

Flo buys a new box for the toys.

The box costs £50

Flo has this money to pay for the box.



How can Flo pay for the box?

(1)

Tick (✓) the notes Flo can use to pay £50

2 Going to the health centre

Ray goes to see Doctor Singh.

Doctor Singh tells Ray to take his tablets
4 times a day.

Ray takes his 1st tablet on Thursday morning.

**What order should Ray take his tablets on
Thursday?**

(2)

Complete the table.

The time of the 1st tablet has been done for you.

time of tablet	order
lunchtime	
evening	
morning	1st
afternoon	

People who are over 60 years old can have a free flu jab.

Here are some people with their ages.



age 30



age 70



age 40



age 80



age 40



age 70



age 50



age 70

How many are over 60 years old?

(2)

Tick (✓) the people who are over 60 years old.

Write the number of people over 60 years old in the box below.

These people are going to have flu jabs today.

Mrs Williams

Miss Begum

Mr O'Reilly

Mrs Smith

There are 3 more people coming to have flu jabs today.

How many people in total are going to have flu jabs today?

(1)

Write your answer in the box below.

Nurse Anna measures how tall these children are.



Clare



Tom



Sam



Zoe



Lee



Luca

Who is the tallest child?

(1)

Write your answer in the box below.

Who is the shortest child?

(1)

Write your answer in the box below.

3 The chemist

John goes to the chemist.

He buys some tablets for £4

John has this money to pay for the tablets.



Which coins can John use to pay £4?

(1)

Tick (✓) the coins to pay £4

How much money in total does John have left?

(1)

Write your answer in the box below.